














# ADDITION WITH PUPPIES!

<p>1)</p> <p style="text-align: center;"><math>1 + 2 = \underline{3}</math></p> <div style="display: flex; align-items: center; justify-content: center; gap: 20px;">  <span>+</span>  <span>=</span> </div>	<p>2)</p> <p style="text-align: center;"><math>3 + 2 = \underline{\quad}</math></p> <div style="display: flex; align-items: center; justify-content: center; gap: 20px;">  <span>+</span>  <span>=</span> </div>	<p>3)</p> <p style="text-align: center;"><math>4 + 3 = \underline{\quad}</math></p> <div style="display: flex; align-items: center; justify-content: center; gap: 20px;">  <span>+</span>  <span>=</span> </div>
<p>4)</p> <p style="text-align: center;"><math>6 + 3 = \underline{\quad}</math></p> <div style="display: flex; align-items: center; justify-content: center; gap: 20px;">  <span>+</span>  <span>=</span> </div>	<p>5)</p> <p style="text-align: center;"><math>8 + 5 = \underline{\quad}</math></p> <div style="display: flex; align-items: center; justify-content: center; gap: 20px;">  <span>+</span>  <span>=</span> </div>	<p>6)</p> <p style="text-align: center;"><math>4 + 2 = \underline{\quad}</math></p> <div style="display: flex; align-items: center; justify-content: center; gap: 20px;">  <span>+</span>  <span>=</span> </div>


# ADDITION WITH PUPPIES!

7)  $6 + 2 = \underline{\quad}$




+ =

8)  $3 + 5 = \underline{\quad}$




+ =

9)  $5 + 3 = \underline{\quad}$




+ =

10)  $5 + 2 = \underline{\quad}$




+ =

11)  $3 + 7 = \underline{\quad}$









+ =


12)  $7 + 4 = \underline{\quad}$



+ =

# ADDITION WITH PUPPIES!

<p>13)</p> <p style="text-align: center;"><b>6 + 1 = ____</b></p> 	<p>14)</p> <p style="text-align: center;"><b>6 + 4 = ____</b></p> 	<p>15)</p> <p style="text-align: center;"><b>5 + 4 = ____</b></p> 
<p>16)</p> <p style="text-align: center;"><b>9 + 4 = ____</b></p> 	<p>17)</p> <p style="text-align: center;"><b>8 + 6 = ____</b></p> 	<p>18)</p> <p style="text-align: center;"><b>4 + 2 = ____</b></p> 



# ADDITION WITH PUPPIES!

## ANSWERS

1) $1 + 2 = 3$	7) $6 + 2 = 8$	13) $6 + 1 = 7$
2) $3 + 2 = 5$	8) $3 + 5 = 8$	14) $6 + 4 = 10$
3) $4 + 3 = 7$	9) $5 + 3 = 8$	15) $5 + 4 = 9$
4) $6 + 3 = 9$	10) $5 + 2 = 7$	16) $9 + 4 = 13$
5) $8 + 5 = 13$	11) $3 + 7 = 10$	17) $8 + 6 = 14$
6) $4 + 2 = 6$	12) $7 + 4 = 11$	18) $4 + 2 = 6$